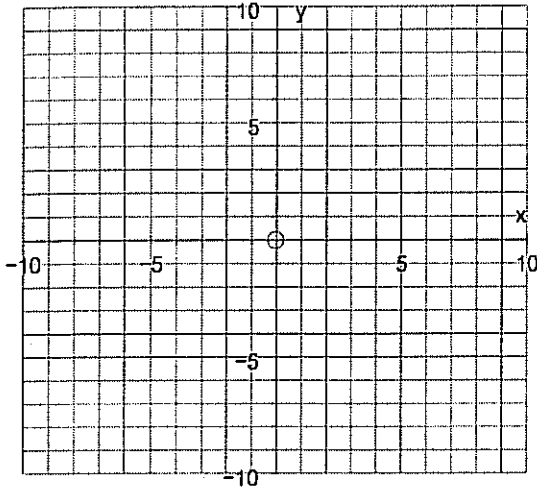


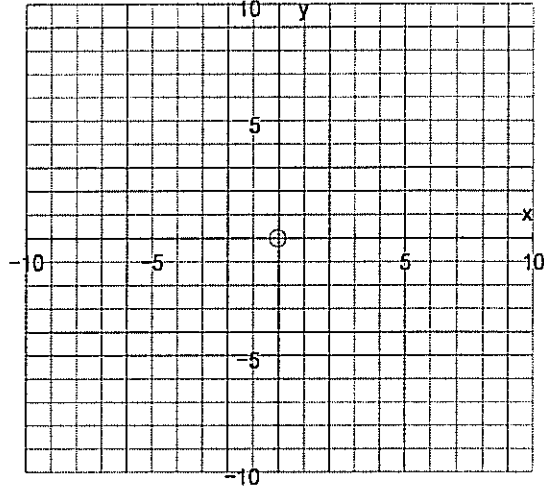
Algebra P4  
Homework, part 2

Name: \_\_\_\_\_

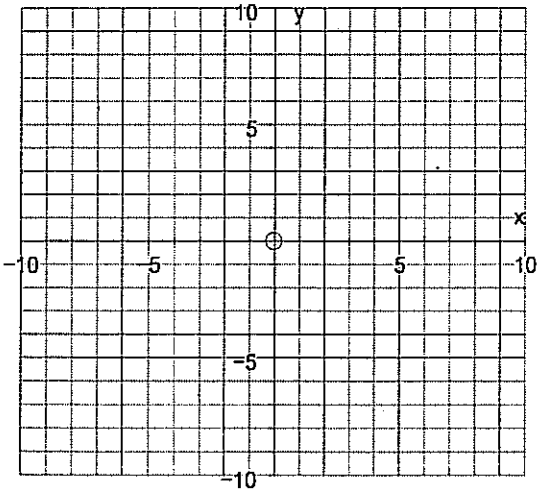
1. Graph  $y = \frac{1}{x-5} + 2$ .



2. Graph  $y = \frac{1+6x}{x}$ . Re-write as two fractions.



3. Graph  $y = \frac{4}{x+3} + 4$ .



4. Graph  $y = \frac{3-2x}{x}$ . Re-write as two fractions.

