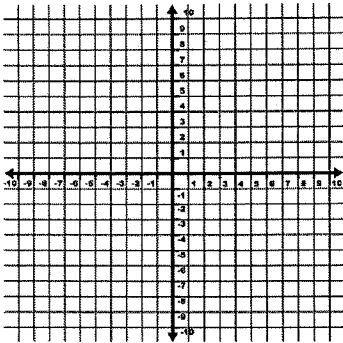


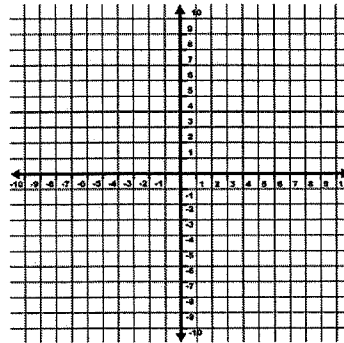
# AA PREP: GRAPHING LINEAR EQUATIONS—WORKSHEET #1

Graph each line.

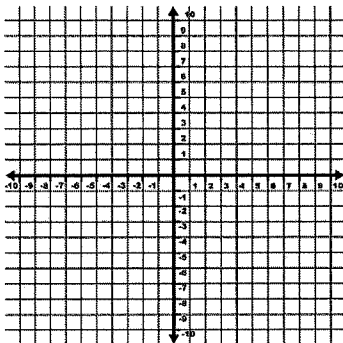
1. Graph:  $y = 3$



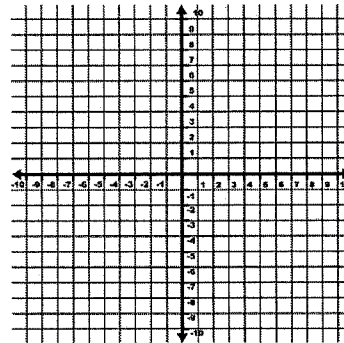
2. Graph:  $y + 3 = -\frac{1}{3}(x + 5)$



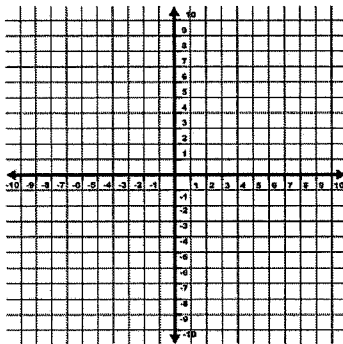
3. Graph:  $2x - 5y = 20$



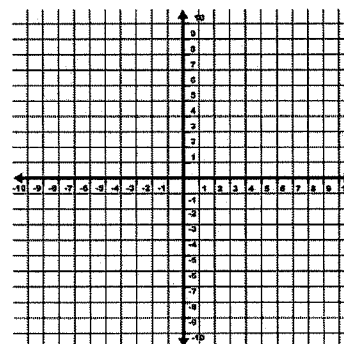
4. Graph:  $y = 4x$



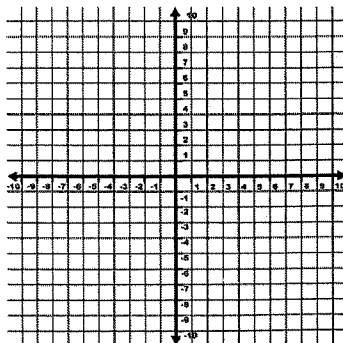
5. Graph:  $x = -6$



6. Graph:  $y = -x$



7. Graph:  $y = \frac{1}{3}x - 5$



8. Graph:  $y - 4 = \frac{2}{5}(x - 1)$

