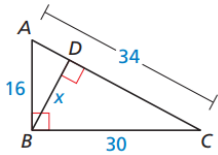
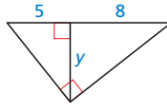


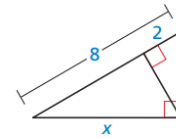
1. Solve for x .



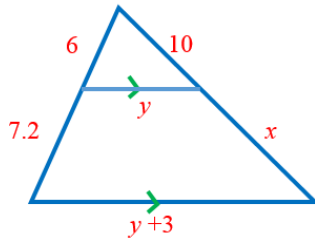
2. Solve for y :



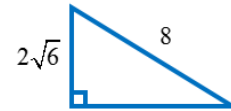
3. Solve for x :



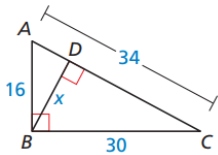
4. Solve for x and y .



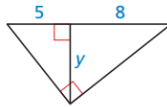
5. Find the missing side length using the Pythagorean Theorem.



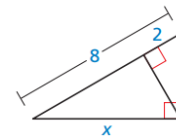
6. Solve for x .



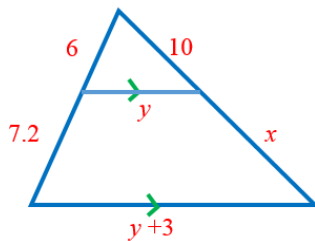
7. Solve for y :



8. Solve for x :



9. Solve for x and y .



10. Find the missing side length using the Pythagorean Theorem.

